




Maths Task Cards


100 Square

No. 1


What number is missing in the 100 Square?

23	24	25
33		35
43	44	45


What number is missing in the 100 Square?

65	66	67
75		77
85	86	87


What number is missing in the 100 Square?

42	43	44
52		54
62	63	64


What number is missing in the 100 Square?

7	8	9
17		19
27	28	29


What number is missing in the 100 Square?

	3	4
12	13	14
22	23	24


What number is missing in the 100 Square?

	57	58
66	67	68
76	77	78


What number is missing in the 100 Square?

	42	43
51	52	53
61	62	63


What number is missing in the 100 Square?

	63	64
72	73	74
82	83	84


What number is missing in the 100 Square?

78	79	80
88	89	90
98	99	


What number is missing in the 100 Square?

47	48	49
57	58	59
67	68	


What number is missing in the 100 Square?

28	29	30
38	39	40
48	49	


What number is missing in the 100 Square?

71	72	73
81	82	83
91	92	


What number is missing in the 100 Square?

53	54	55
63	64	65
	74	75


What number is missing in the 100 Square?

75	76	77
85	86	87
	96	97


What number is missing in the 100 Square?

2	3	4
12	13	14
	23	24


What number is missing in the 100 Square?

71	72	73
81	82	83
	92	93


What number is missing in the 100 Square?

14	15	16
24	25	
34	35	36


What number is missing in the 100 Square?

53	54	55
63	64	
73	74	75


What number is missing in the 100 Square?

1	2	3
11	12	
21	22	23


What number is missing in the 100 Square?

18	19	20
28	29	
38	39	40


What number is missing in the 100 Square?

72	73	74
	83	84
92	93	94


What number is missing in the 100 Square?

57	58	59
	68	69
77	78	79


What number is missing in the 100 Square?

36	37	38
	47	48
56	57	58


What number is missing in the 100 Square?

74	75	76
	85	86
94	95	96


What number is missing in the 100 Square?

7	8	
17	18	19
27	28	29


What number is missing in the 100 Square?

46	47	
56	57	58
66	67	68


What number is missing in the 100 Square?

77	78	
87	88	89
97	98	99


What number is missing in the 100 Square?

42	43	
52	53	54
62	63	64


What number is missing in the 100 Square?

11	12	13
21	22	23
31		33


What number is missing in the 100 Square?

4	5	6
14	15	16
24		26


What number is missing in the 100 Square?

76	77	78
86	87	88
96		98


What number is missing in the 100 Square?

37	38	39
47	48	49
57		59


What number is missing in the 100 Square?

15		17
25	26	27
35	36	37


What number is missing in the 100 Square?

63		65
73	74	75
83	84	85


What number is missing in the 100 Square?

6		8
16	17	18
26	27	28


What number is missing in the 100 Square?

74		76
84	85	86
94	95	96


What number is missing in the 100 Square?

77		79
87	88	89
97	98	99


What number is missing in the 100 Square?

34		36
44	45	46
54	55	56


What number is missing in the 100 Square?

4		6
14	15	16
24	25	26


What number is missing in the 100 Square?

37		39
47	48	49
57	58	59


What number is missing in the 100 Square?

	2	3
11	12	13
21	22	23


What number is missing in the 100 Square?

77	78	79
87	88	89
97	98	


What number is missing in the 100 Square?

8	9	
18	19	20
28	29	30


What number is missing in the 100 Square?

68	69	
78	79	80
88	89	90


What number is missing in the 100 Square?

	62	63
71	72	73
81	82	83


What number is missing in the 100 Square?

64	65	66
74	75	76
84	85	


What number is missing in the 100 Square?

52	53	
62	63	64
72	73	74


What number is missing in the 100 Square?

27	28	
37	38	39
47	48	49

What number is missing in the 100 Square?

	12	13
21	22	23
31	32	33

What number is missing in the 100 Square?

15	16	17
25	26	27
35	36	

Resources used in this file from:



[https://www.teacherspayteachers.com/
Store/Hello-Literacy](https://www.teacherspayteachers.com/Store/Hello-Literacy)



[https://www.teacherspayteachers.com/
Store/Kb-Konnected](https://www.teacherspayteachers.com/Store/Kb-Konnected)



[https://www.teacherspayteachers.com/
Store/Educlips](https://www.teacherspayteachers.com/Store/Educlips)