




Maths Task Cards


100 Square


No. 3


What number goes where the  is in the 100 Square?

12		14
		
32		34


What number goes where the  is in the 100 Square?

34		36
		
54		56


What number goes where the  is in the 100 Square?


63		65
		
83		85


What number goes where the  is in the 100 Square?


76		78
		
96		98


What number goes where the  is in the 100 Square?


67		69
		
87		89


What number goes where the  is in the 100 Square?


51		53
		
71		73


What number goes where the  is in the 100 Square?


26		28
		
46		48


What number goes where the  is in the 100 Square?

72		74
		
92		94


What number goes where the  is in the 100 Square?


48		50
		
68		70


What number goes where the  is in the 100 Square?

4		6
		
24		26


What number goes where the  is in the 100 Square?


43		45
		
63		65


What number goes where the  is in the 100 Square?


1		3
		
21		23


What number goes where the  is in the 100 Square?


74		76
		
94		96


What number goes where the  is in the 100 Square?


37		39
		
57		59


What number goes where the  is in the 100 Square?


8		10
		
28		30


What number goes where the  is in the 100 Square?

31		33
		
51		53


What number goes where the  is in the 100 Square?


55		57
		
75		77


What number goes where the  is in the 100 Square?

23		25
		
43		45


What number goes where the  is in the 100 Square?


78		80
		
98		100


What number goes where the  is in the 100 Square?


6		8
		
26		28


What number goes where the  is in the 100 Square?

15		17
		
35		37


What number goes where the  is in the 100 Square?


71		73
		
91		93


What number goes where the  is in the 100 Square?


32		34
		
52		54


What number goes where the  is in the 100 Square?


66		68
		
86		88


What number goes where the  is in the 100 Square?

46		48
		
66		68


What number goes where the  is in the 100 Square?


18		20
		
38		40


What number goes where the  is in the 100 Square?


54		56
		
74		76


What number goes where the  is in the 100 Square?


13		15
		
33		35


What number goes where the  is in the 100 Square?

42		44
		
62		64


What number goes where the  is in the 100 Square?

35		37
		
55		57


What number goes where the  is in the 100 Square?


77		79
		
97		99


What number goes where the  is in the 100 Square?


21		23
		
41		43


What number goes where the  is in the 100 Square?

64		66
		
84		86


What number goes where the  is in the 100 Square?

16		18
		
36		38


What number goes where the  is in the 100 Square?


73		75
		
93		95


What number goes where the  is in the 100 Square?


3		5
		
23		25


What number goes where the  is in the 100 Square?


25		27
		
45		47


What number goes where the  is in the 100 Square?

58		60
		
78		80


What number goes where the  is in the 100 Square?

62		64
		
82		84


What number goes where the  is in the 100 Square?


45		47
		
65		67


What number goes where the  is in the 100 Square?


33		35
		
53		55


What number goes where the  is in the 100 Square?


36		38
		
56		58


What number goes where the  is in the 100 Square?


2		4
		
22		24


What number goes where the  is in the 100 Square?


38		40
		
58		60


What number goes where the  is in the 100 Square?

44		46
		
64		66


What number goes where the  is in the 100 Square?


5		7
		
25		27


What number goes where the  is in the 100 Square?


17		19
		
37		39


What number goes where the  is in the 100 Square?

75		77
		
95		97

What number goes where the  is in the 100 Square?

56		58
		
76		78

What number goes where the  is in the 100 Square?

52		54
		
72		74

Resources used in this file from:



[https://www.teacherspayteachers.com/
Store/Hello-Literacy](https://www.teacherspayteachers.com/Store/Hello-Literacy)



[https://www.teacherspayteachers.com/
Store/Kb-Konnected](https://www.teacherspayteachers.com/Store/Kb-Konnected)



[https://www.teacherspayteachers.com/
Store/Educlips](https://www.teacherspayteachers.com/Store/Educlips)