


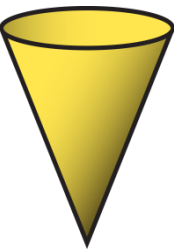
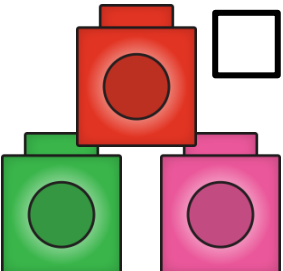

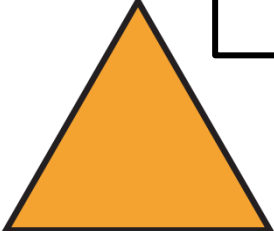








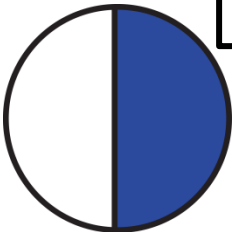


MATHS TRAIL

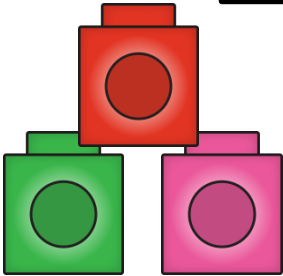

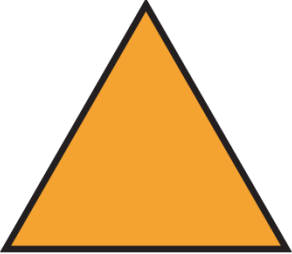








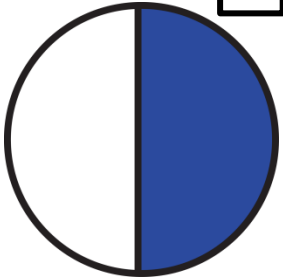
How many of these can you find on your Maths Trail? Tick the box when you find each one.

 <input type="checkbox"/>	 <input type="checkbox"/>	 <input type="checkbox"/>	 <input type="checkbox"/>
 <input type="checkbox"/>	 <input type="checkbox"/>	 <input type="checkbox"/>	 <input type="checkbox"/>
 <input type="checkbox"/>	 <input type="checkbox"/>	 <input type="checkbox"/>	 <input type="checkbox"/>
 <input type="checkbox"/>	 <input type="checkbox"/>	 <input type="checkbox"/>	 <input type="checkbox"/>

Were you able to find everything on the list?

MATHS TRAIL





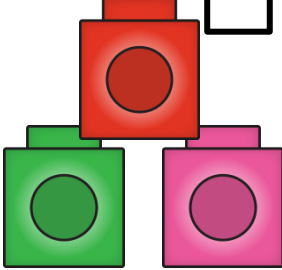

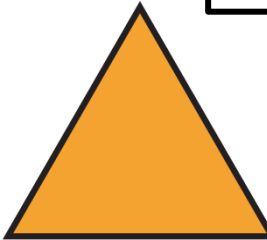





How many of these can you find on your Maths Trail? Tick the box when you find each one.

 <input data-bbox="311 537 382 606" type="checkbox"/>	 <input data-bbox="631 537 702 606" type="checkbox"/>	 <input data-bbox="948 537 1019 606" type="checkbox"/>	 <input data-bbox="1268 537 1339 606" type="checkbox"/>
 <input data-bbox="311 938 382 1008" type="checkbox"/>	 <input data-bbox="631 938 702 1008" type="checkbox"/>	 <input data-bbox="948 938 1019 1008" type="checkbox"/>	 <input data-bbox="1268 938 1339 1008" type="checkbox"/>
 <input data-bbox="311 1325 382 1394" type="checkbox"/>	 <input data-bbox="631 1325 702 1394" type="checkbox"/>	 <input data-bbox="948 1325 1019 1394" type="checkbox"/>	 <input data-bbox="1268 1325 1339 1394" type="checkbox"/>

Were you able to find everything on the list?

MATHS TRAIL


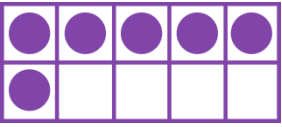










How many of these can you find on your Maths Trail? Tick the box when you find each one.

 <input data-bbox="307 492 371 560" type="checkbox"/>	 <input data-bbox="621 492 685 560" type="checkbox"/>	 <input data-bbox="935 492 999 560" type="checkbox"/>	 <input data-bbox="1263 492 1328 560" type="checkbox"/>
 <input data-bbox="307 879 371 946" type="checkbox"/>	 <input data-bbox="621 879 685 946" type="checkbox"/>	 <input data-bbox="935 879 999 946" type="checkbox"/>	 <input data-bbox="1263 879 1328 946" type="checkbox"/>
 <input data-bbox="307 1275 371 1342" type="checkbox"/>	 <input data-bbox="621 1275 685 1342" type="checkbox"/>	 <input data-bbox="935 1275 999 1342" type="checkbox"/>	 <input data-bbox="1263 1275 1328 1342" type="checkbox"/>

Were you able to find everything on the list?

MATHS TRAIL







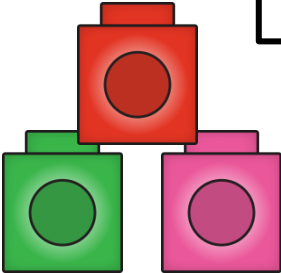


How many of these can you find on your Maths Trail? Tick the box when you find each one.

 <input data-bbox="307 492 378 569" type="checkbox"/>	 <input data-bbox="621 492 692 569" type="checkbox"/>	 <input data-bbox="942 492 1013 569" type="checkbox"/>	 <input data-bbox="1263 492 1335 569" type="checkbox"/>
 <input data-bbox="307 917 378 994" type="checkbox"/>	 <input data-bbox="621 917 692 994" type="checkbox"/>	 <input data-bbox="942 917 1013 994" type="checkbox"/>	 <input data-bbox="1263 917 1335 994" type="checkbox"/>
 <input data-bbox="307 1323 378 1400" type="checkbox"/>	 <input data-bbox="621 1323 692 1400" type="checkbox"/>	 <input data-bbox="942 1323 1013 1400" type="checkbox"/>	 <input data-bbox="1263 1323 1335 1400" type="checkbox"/>

Were you able to find everything on the list?

MATHS TRAIL

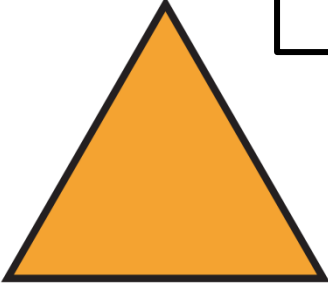
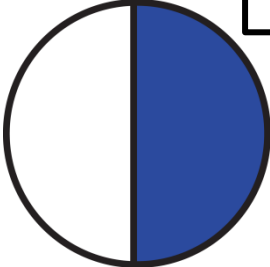







How many of these can you find on your Maths Trail? Tick the box when you find each one.

 <input data-bbox="448 562 515 629" type="checkbox"/>	 <input data-bbox="843 558 911 625" type="checkbox"/>	 <input data-bbox="1236 558 1303 625" type="checkbox"/>
 <input data-bbox="448 933 515 1000" type="checkbox"/>	 <input data-bbox="843 933 911 1000" type="checkbox"/>	 <input data-bbox="1236 933 1303 1000" type="checkbox"/>
 <input data-bbox="448 1300 515 1367" type="checkbox"/>	 <input data-bbox="843 1300 911 1367" type="checkbox"/>	 <input data-bbox="1236 1300 1303 1367" type="checkbox"/>

Were you able to find everything on the list?

MATHS TRAIL


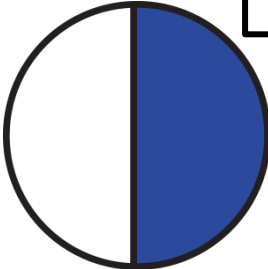






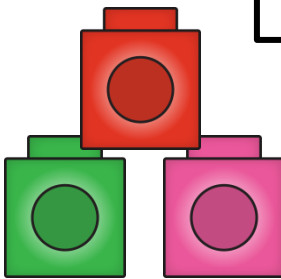
How many of these can you find on your Maths Trail? Tick the box when you find each one.

 <input data-bbox="448 562 515 629" type="checkbox"/>	 <input data-bbox="843 562 911 629" type="checkbox"/>	 <input data-bbox="1236 562 1303 629" type="checkbox"/>
 <input data-bbox="448 935 515 1002" type="checkbox"/>	 <input data-bbox="843 935 911 1002" type="checkbox"/>	 <input data-bbox="1236 935 1303 1002" type="checkbox"/>
 <input data-bbox="448 1302 515 1369" type="checkbox"/>	 <input data-bbox="843 1302 911 1369" type="checkbox"/>	 <input data-bbox="1236 1302 1303 1369" type="checkbox"/>

Were you able to find everything on the list?


MATHS TRAIL

How many of these can you find on your Maths Trail? Tick the box when you find each one.

 <input data-bbox="449 560 514 627" type="checkbox"/>	 <input data-bbox="842 560 906 627" type="checkbox"/>	 <input data-bbox="1235 560 1299 627" type="checkbox"/>
 <input data-bbox="449 937 514 1004" type="checkbox"/>	 <input data-bbox="842 927 906 994" type="checkbox"/>	 <input data-bbox="1235 927 1299 994" type="checkbox"/>
 <input data-bbox="449 1294 514 1362" type="checkbox"/>	 <input data-bbox="842 1294 906 1362" type="checkbox"/>	 <input data-bbox="1235 1294 1299 1362" type="checkbox"/>

Were you able to find everything on the list?

Maths Trail



 Seomra Ranga

© Seomra Ranga 2022 www.seomraranga.com


Maths Trail



 Seomra Ranga

© Seomra Ranga 2022 www.seomraranga.com


Maths Trail



 Seomra Ranga

© Seomra Ranga 2022 www.seomraranga.com

Maths Trail



 Seomra Ranga

© Seomra Ranga 2022 www.seomraranga.com


Maths Trail



 Seomra Ranga

© Seomra Ranga 2022 www.seomraranga.com

Maths Trail



 Seomra Ranga

© Seomra Ranga 2022 www.seomraranga.com


Maths Trail



 Seomra Ranga

© Seomra Ranga 2022 www.seomraranga.com


Maths Trail



 Seomra Ranga

© Seomra Ranga 2022 www.seomraranga.com

Maths Trail



 Seomra Ranga

© Seomra Ranga 2022 www.seomraranga.com


Maths Trail



 Seomra Ranga

© Seomra Ranga 2022 www.seomraranga.com


Maths Trail



 Seomra Ranga

© Seomra Ranga 2022 www.seomraranga.com

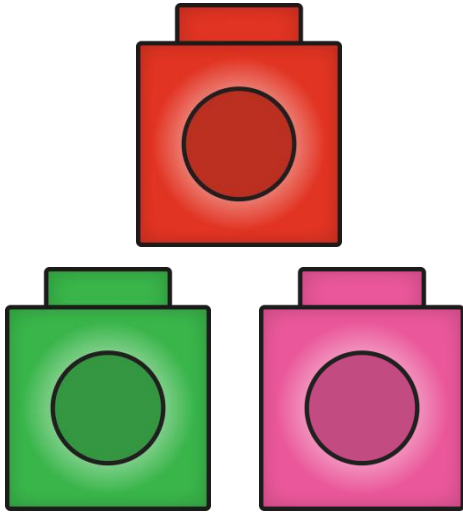
Maths Trail



 Seomra Ranga

© Seomra Ranga 2022 www.seomraranga.com


Maths Trail



 Seomra Ranga

© Seomra Ranga 2022 www.seomraranga.com


Maths Trail



 Seomra Ranga

© Seomra Ranga 2022 www.seomraranga.com


Maths Trail



 Seomra Ranga

© Seomra Ranga 2022 www.seomraranga.com


Maths Trail



 Seomra Ranga

© Seomra Ranga 2022 www.seomraranga.com

Maths Trail



circle



© Seomra Ranga 2022 www.seomraranga.com

Maths Trail




square



© Seomra Ranga 2022 www.seomraranga.com

Maths Trail




triangle



© Seomra Ranga 2022 www.seomraranga.com

Maths Trail




rectangle



© Seomra Ranga 2022 www.seomraranga.com

Maths Trail




two



© Seomra Ranga 2022 www.seomraranga.com

Maths Trail



six



© Seomra Ranga 2022 www.seomraranga.com

Maths Trail




one



© Seomra Ranga 2022 www.seomraranga.com

Maths Trail

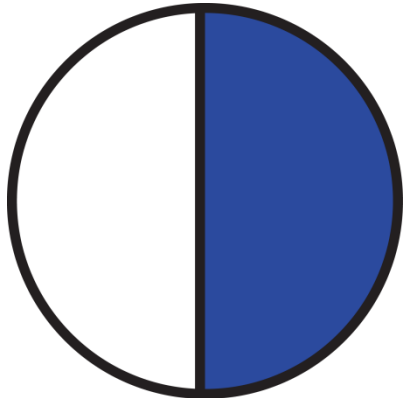


cone



© Seomra Ranga 2022 www.seomraranga.com

Maths Trail



half



© Seomra Ranga 2022 www.seomraranga.com

Maths Trail




eight



© Seomra Ranga 2022 www.seomraranga.com

Maths Trail




ten



© Seomra Ranga 2022 www.seomraranga.com

Maths Trail

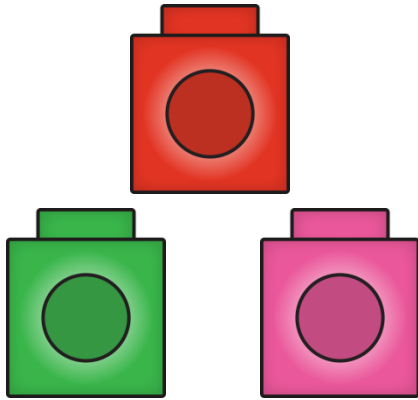


four



© Seomra Ranga 2022 www.seomraranga.com

Maths Trail

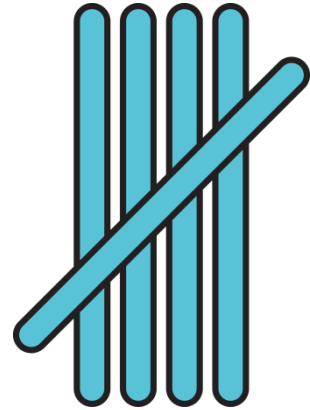


three



© Seomra Ranga 2022 www.seomraranga.com

Maths Trail




five



© Seomra Ranga 2022 www.seomraranga.com

Maths Trail




nine



© Seomra Ranga 2022 www.seomraranga.com

Maths Trail



three o'clock



© Seomra Ranga 2022 www.seomraranga.com

For Your Information

Thank you for downloading this Seomra Ranga resource. We hope that you find it practical and useful in your classroom.

Please be aware of the following conditions before using this resource.

Please Do:

- Print and copy this resource so that you can use it with your pupils.
- Make this resource available to your pupils in a private enclosed online space eg. google classroom, seesaw, edublogs etc.
- Tell others if you have found it useful.

Please Do Not:

- Copy or share this resource (in part or whole) with others who have not joined our website. by becoming a member for themselves, they will help the site develop into the future.
- Make this resource available on your school website for anyone to download.
- Share this resource with other teachers in online groups eg. facebook groups, whatsapp groups etc.

Kind regards, Seomra Ranga

Resources Used in this File From:



<https://www.teacherspayteachers.com/Store/Hello-Literacy>



<https://www.teacherspayteachers.com/Store/Laine-Sutherland-Designs>



<https://www.teacherspayteachers.com/Store/Whimsy-Clips>



<https://www.teacherspayteachers.com/Store/Hidesys-Clipart>



<https://www.teacherspayteachers.com/Store/For-A-Rainy-Day>